

## Subtraction Activity 3

Maximum Expected Time Completion: 15 minutes

**Color and subtract.**

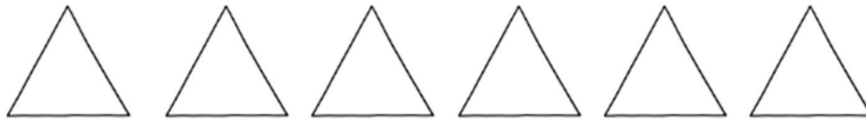
1.



Color 3 rectangles with red.

How many rectangles are uncolored? \_\_\_\_\_

2.



Color 4 triangles with black.


How many triangles are uncolored? \_\_\_\_\_

3.



Color 8 circles with blue.

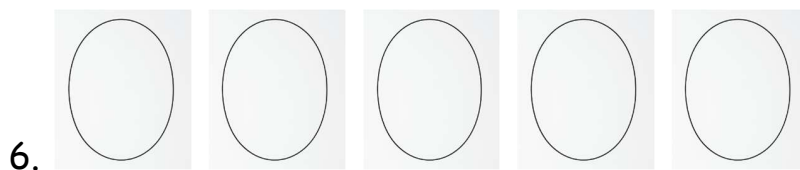
How many circles are uncolored? \_\_\_\_\_




Color 6 squares with yellow.  
How many squares are uncolored? \_\_\_\_\_



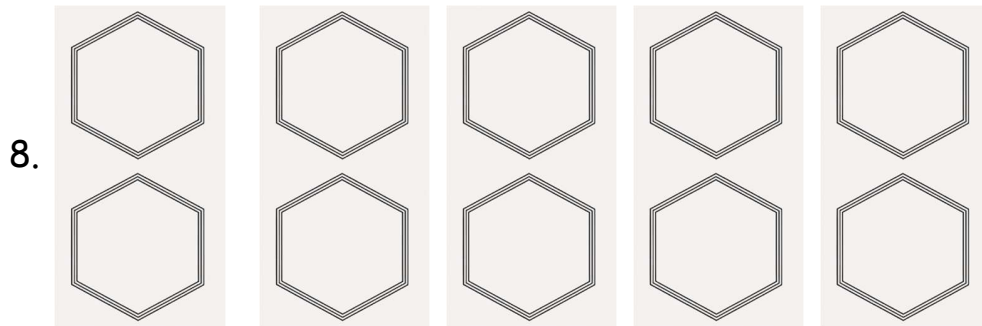
Color 4 hearts with red.  
How many hearts are uncolored? \_\_\_\_\_



Color 3 ovals with green.  
How many ovals are uncolored? \_\_\_\_\_



Color 10 stars with blue.  
How many stars are uncolored? \_\_\_\_\_

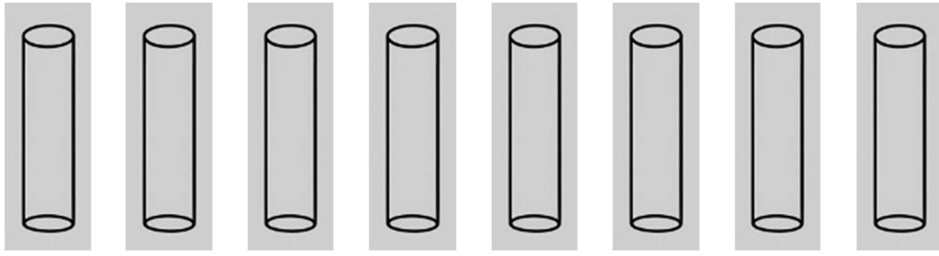


Color 10 hexagons with brown.  
How many hexagons are uncolored? \_\_\_\_\_



Color 7 inverted cones with green.  
How many inverted cones are uncolored? \_\_\_\_\_

10.



Color 8 cylinders with green.  
How many cylinders are uncolored? \_\_\_\_\_